



















Nom: _____

Data: _____

Sumes musicals


Observa el valor de les figures i resol.

 $\circ + \text{rest} + \text{beamed eighth notes} + \text{eighth note} = \underline{\quad 7 \quad}$

 $\text{dotted quarter} + \text{eighth note} + \text{beamed eighth notes} + \text{quarter note} = \underline{\quad \quad}$

 $\text{beamed eighth notes} + \text{quarter note} + \text{eighth note} + \text{quarter note} = \underline{\quad \quad}$

 $\text{quarter note} + \text{beamed eighth notes} + \text{half note} + \text{beamed eighth notes} = \underline{\quad \quad}$

 $\text{beamed eighth notes} + \text{quarter rest} + \text{quarter note} + \text{whole note} = \underline{\quad \quad}$

Envieu les vostres respostes a enmiaixinano@gmail.com.