

Name: \_\_\_\_\_

Class: \_\_\_\_\_

# Numbers and time!

1. Read, circle and write the correct numbers.

17	Seventeen	Seventy	
28	Twenty-five	Twenty-eight	
35	Thirty-one	Thirty-five	
49	Forty-nine	Forty-six	
51	Fifty-three	Fifty-one	
64	Sixty-nine	Sixty-four	
73	Seventy-three	Seventy-two	
82	Eighty-six	Eighty-two	
96	Ninety-six	Ninety-four	
100	One hundred	One thousand	

2. What time is it? Read and circle the answer:



3:00

It's five o'clock.

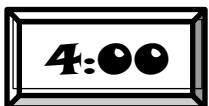
It's three o'clock.



9:00

It's eleven o'clock.


It's nine o'clock.



4:00

It's four o'clock.

It's two o'clock.



12:00





It's twelve o'clock.

It's ten o'clock.

3. Circle and write: 10, 20, 30, 40, 50, 60, 70, 80 and 90.

<b>T</b>	<b>E</b>	<b>N</b>	<b>L</b>	<b>F</b>	<b>Y</b>	<b>N</b>	<b>A</b>	<b>O</b>	<b>T</b>
<b>S</b>	<b>F</b>	<b>T</b>	<b>I</b>	<b>O</b>	<b>D</b>	<b>I</b>	<b>R</b>	<b>E</b>	<b>W</b>
<b>E</b>	<b>T</b>	<b>Y</b>	<b>T</b>	<b>R</b>	<b>J</b>	<b>N</b>	<b>S</b>	<b>I</b>	<b>E</b>
<b>V</b>	<b>Y</b>	<b>R</b>	<b>R</b>	<b>T</b>	<b>E</b>	<b>E</b>	<b>I</b>	<b>G</b>	<b>N</b>
<b>E</b>	<b>S</b>	<b>V</b>	<b>G</b>	<b>Y</b>	<b>C</b>	<b>T</b>	<b>X</b>	<b>H</b>	<b>T</b>
<b>N</b>	<b>F</b>	<b>I</b>	<b>F</b>	<b>T</b>	<b>Y</b>	<b>Y</b>	<b>T</b>	<b>T</b>	<b>Y</b>
<b>T</b>	<b>A</b>	<b>H</b>	<b>M</b>	<b>D</b>	<b>B</b>	<b>N</b>	<b>Y</b>	<b>Y</b>	<b>N</b>
<b>Y</b>	<b>T</b>	<b>H</b>	<b>I</b>	<b>R</b>	<b>T</b>	<b>Y</b>	<b>E</b>	<b>E</b>	<b>N</b>
<b>10</b>	<b>Ten</b>								
<b>20</b>	<b>Twenty</b>								
<b>30</b>	<b>Thirty</b>								
<b>40</b>	<b>Forty</b>								
<b>50</b>	<b>Fifty</b>								
<b>60</b>	<b>Sixty</b>								
<b>70</b>	<b>Seventy</b>								
<b>80</b>	<b>Eighty</b>								
<b>90</b>	<b>Ninety</b>								

4. Read and draw the time:



It's three o'clock	It's eleven o'clock	It's six o'clock	It's one o'clock
-----------------------	------------------------	---------------------	---------------------

It is easy 😊

OK 😐

difficult ☹️