

Name:

Course:

1 Complete the following sentences with the correct words:

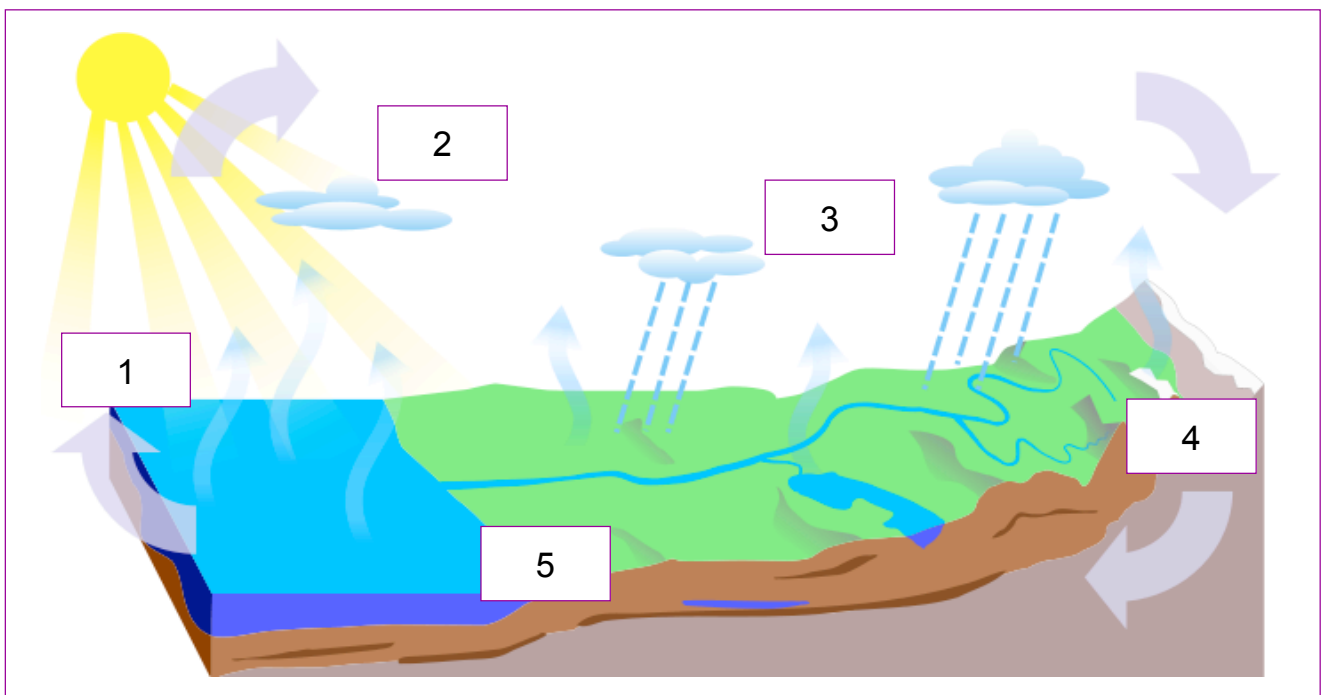
The atmosphere regulates the surface of the Earth.

The atmosphere filters from the Sun.

The atmosphere is a layer of air which covers

The atmosphere changes all the time. This determines

2 Complete the following sentences about the water cycle:



1: The heat of the Sun the water on the Earth's surface.

2: As it rises, water vapour gets colder and

3: The water in clouds fall to Earth in form of

4: A part of the water goes to

5: All the water goes back

3 Say if these statements are true (T) or false (F):

☐ In summer, the temperature in Spain can reach -34°C .

☐ Wind can be called a breeze, a gale and a hurricane.

☐ Atmospheric pressure is lower in the beach than in the mountain.

☐ Humidity indicates the quantity of water vapour there is in the air.

Name:

Course:

- 1 Use the digital explorer to find out the weather forecast for tomorrow in your autonomous community:

<http://www.tiching.com/685951>

What will the minimum and maximum temperatures be?

What will the wind speed be?

What percentage of humidity will there be in the air?

If there is a sea or ocean, how will it be?

- 2 Look at these two images and find information to answer the following questions:





Which climates do these places belong to?

How does the climate affect their inhabitants?

Say which countries could the pictures correspond to:

- 3 What do these instruments measure?



.....

.....

.....

.....