



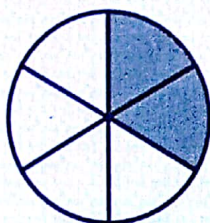
FRACCIONES

Nombre y apellidos:

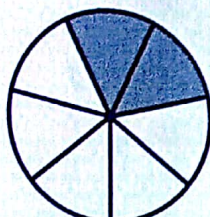
Curso:

Fecha:

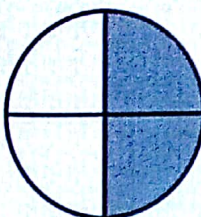
● Escribe la fracción que se representa en cada caso:



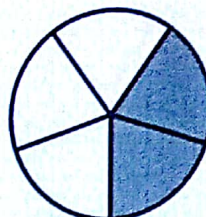
$$\frac{2}{6}$$



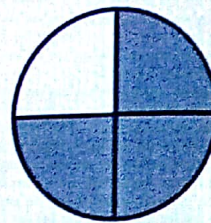
$$\frac{2}{7}$$



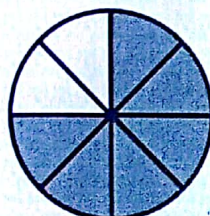
$$\frac{2}{4}$$



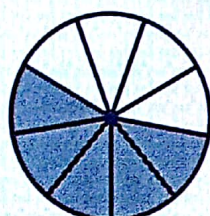
$$\frac{2}{5}$$



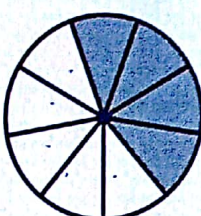
$$\frac{3}{4}$$



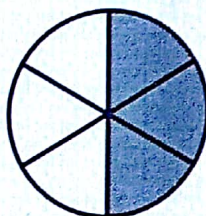
$$\frac{6}{8}$$



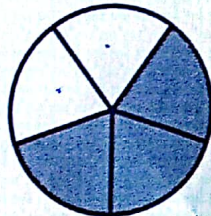
$$\frac{5}{9}$$




$$\frac{4}{9}$$



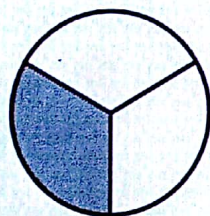
$$\frac{3}{6}$$



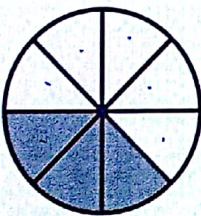
$$\frac{3}{5}$$



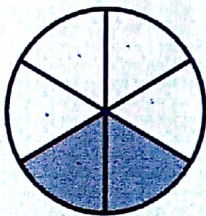
$$\frac{1}{2}$$



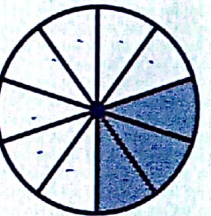
$$\frac{1}{3}$$



$$\frac{3}{8}$$

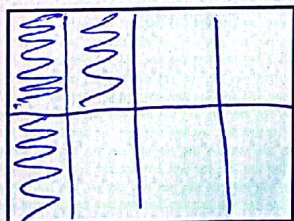


$$\frac{2}{6}$$

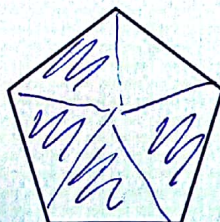


$$\frac{3}{10}$$


● Representa las siguientes fracciones:



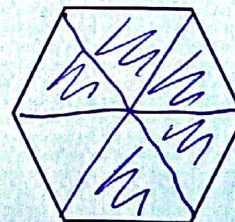
$$\frac{3}{8}$$



$$\frac{4}{5}$$



$$\frac{2}{9}$$



$$\frac{5}{6}$$